

LITTLE MUHEJI SCHOOL

REVISION WORK 2020

PRIMARY ONE SET I

NAME: _____

CLASS: _____ STREAM: _____

ENGLISH

SECTION A

1. Fill in the missing letters.

Sch____l ch____lkbo____rd b____nch cha____k


2. What is this?







3. Use "Yes, it is, No, it is not.



Is this a pot?

.....



Is this a rubber?

.....



Is this a chalkboard?

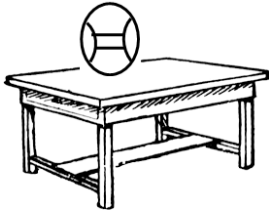
.....



Is this a tin?


.....

4. Fill in 'under', 'on', in, and 'over' to complete sentences.



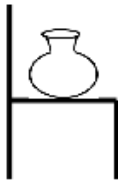
a)

The ball is.....the table.



b)

The water is..... the bucket.



c)

The pot is..... the chair.



d)

The aeroplane is flying.....the tree.

5. Give the opposites of these words.

hot - _____

mother _____

good - _____

happy - _____

short - _____

6. Write in words.

10 _____

9 _____

8 _____

5 _____

20 _____

7. Animals and their young ones.

The young cat is a

The young dog is a.....

The young one of a man is a

The young one of a hen is a.....

8. Draw these pictures.

dusters	books	pencils	baskets

9. Give the plurals of these words.

mat -



book -



box -

bench -

lorry -

10. Count and write in words.





11. Change words from small to capital letters.

desk _____ hoe _____ basket _____
 chair _____ drum _____

12. Form words from the puzzle.

b	r	o	t	h	e	r
a	m	o	t	h	e	r
b	g	r	o	w	c	b
y	o	u	n	g	h	o
s	u	n	g	.	i	o
d	o	g	u	p	n	k

1 _____ 6 _____
 2 _____ 7 _____
 3 _____ 8 _____
 4 _____ 9 _____
 5 _____ 10 _____

13. Read the poem and answer the questions.

Food

Cassava Cassava
 When I eat cassava
 I get energy

Chicken chicken
When I eat chicken
I get proteins

Yam Yams
When I eat yams
I get energy

By Janes.

Questions.

a)What is the poem about?

.....

b)Write the food in the poem.

i).....

ii).....

iii).....

c)Who wrote the poem?

.....

END

MATHEMATICS


Theme: our school

Sets


1. What is a set?

.....

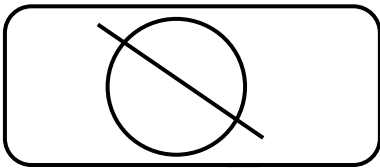
2. Name these sets.




A set of _____



A set of _____

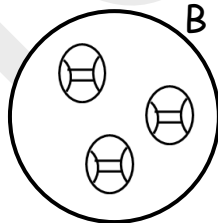
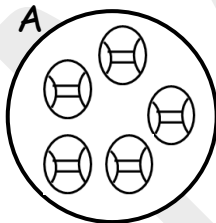


An _____



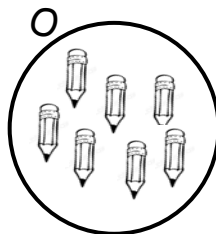
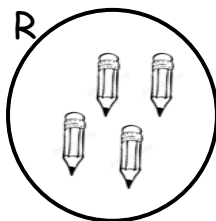
A set of _____

3. Compare these sets using less or more.



Set A has _____ balls than Set B.


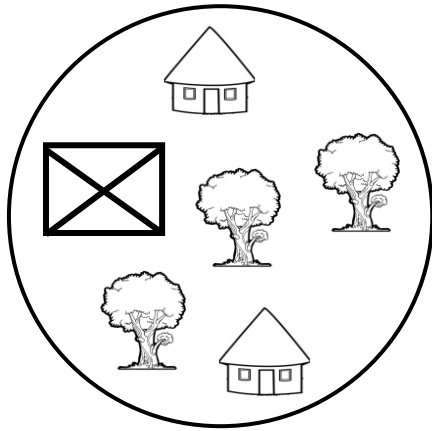
Set B has _____ balls than Set B.




Set R has _____ pencils than Set O.

Set O has _____ pencils than Set R.


4. Form small sets from a big set.



A set of _____



A set of _____




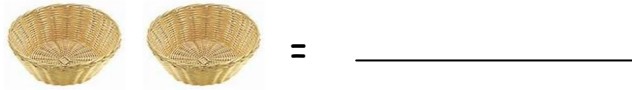
A set of _____

Theme: Our home

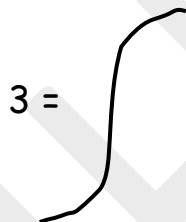
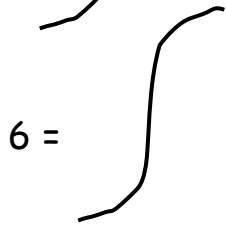
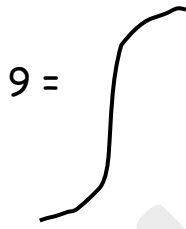
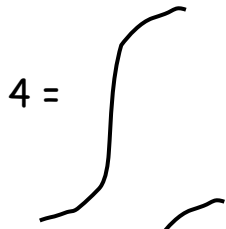
Counting and writing

5. Count and write in words.





6. Draw beads for the number.



7. Match numbers to number words.

twenty 14

twelve 20

thirteen 40

forty 13

fourteen 12

8. Fill in the missing numbers.

0, 1, _____, 3, 4, _____, _____, 7.

20, 19, _____, 17, 16, _____, 14, _____

9. Write the number before.

_____, 1 _____, 8 _____, 40 _____, 20

10. Underline the bigger number.

4, 3, 2

9, 20, 3

7, 3, 8

12, 10, 30

11. Arrange the numbers from the smallest to the biggest.

4,3,2,8,1,9,6

12. Write in words.

42 = _____

20 = _____

18 = _____

11 = _____

50 = _____

0 = _____

13. Draw these shapes.

cone	square	circle
rectangle	triangle	zigzag line

Our community.

14. Add the given numbers.

4 + 2 + 6 = _____

9 + 2 = _____

7 + 0 = _____

9 + 9 = _____

$$\begin{array}{r} 3 \quad 6 \quad 1 \quad 7 \quad 9 \quad 7 \\ + 4 \quad 2 \quad + \quad 0 \quad + \quad 2 \\ \hline \hline \hline \end{array}$$

15. Teddy has 3 balls. Joan has 2 balls.
They both have _____ balls.

16. Nine plus two equals to _____

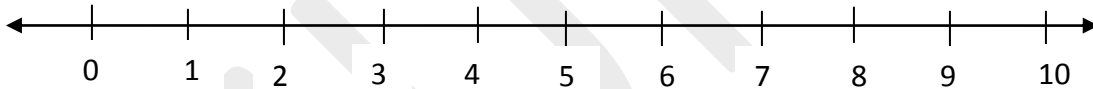
17. 4 nails plus 6 nails = _____

18. Use a number line and add.

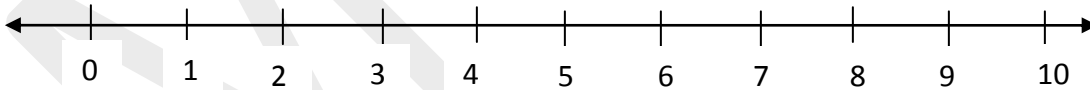
$$4 + 4 =$$



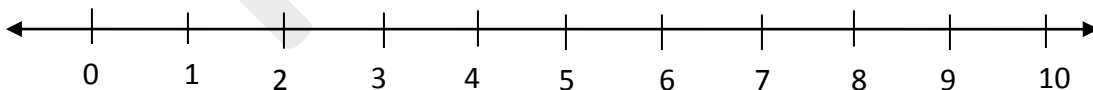
$$3 + 2 =$$



$$2 + 7 =$$



$$5 + 3 =$$



19. How many days make a week?

20. Write the second day of the week.

21. Which day has seven letters?

22. Fill in the missing days of the week.

Sunday, _____, Tuesday, _____, _____,

Friday, _____

23. Show the time given on the clock face.



It is 1 o'clock.



It is 8 o'clock.



It is 6 o'clock.



It is 12 o'clock.

24. **Subtract.**

$$4 - 4 =$$

$$9 - 0 =$$

$$3 - 2 =$$

$$\begin{array}{r} 36 \\ - 4 \\ \hline \end{array}$$

$$\begin{array}{r} 98 \\ - 55 \\ \hline \end{array}$$

$$\begin{array}{r} 46 \\ - 2 \\ \hline \end{array}$$

25. **Fill in the missing tens and ones.**

$$36 = \underline{\quad} \text{ tens } \underline{\quad} \text{ ones}$$

$$42 = \underline{\quad} \text{ tens } \underline{\quad} \text{ ones}$$

$$17 = \underline{\quad} \text{ tens } \underline{\quad} \text{ ones}$$

$$8 = \underline{\quad} \text{ tens } \underline{\quad} \text{ ones}$$

$$99 = \underline{\quad} \text{ tens } \underline{\quad} \text{ ones}$$

Theme: The human body and health


26. Multiply the given numbers.

$$\begin{array}{r} 42 \\ \times 2 \\ \hline \\ \hline \end{array}$$

$$3 \times 2 =$$
$$5 \times 2 =$$

$$\begin{array}{r} 13 \\ \times 2 \\ \hline \\ \hline \end{array}$$

27. Study the graph below and answer the questions correctly.



Questions.

a) Who picked seven cups?

b) Who picked the least number of cups?

c) Mark picked _____ cups.

d) How many cups did they pick altogether?

END

LITERACY A

THEME: OUR SCHOOL

1. What is a school?

.....

2. Name four groups of people that work at School.

i).....

ii).....

iii).....

iv).....

3. What title is given to the head of the school?

.....

4. Give any two activities that we do at school?

i).....

ii).....

5. What is a family?

.....

6. Give any two roles of the father.

i).....

ii).....

7. Draw the mother cooking food.



8. Name any two items that the mother uses for cooking food.
 (i)
 (ii)

9. Match the following people to their responsibilities.

People

Responsibilities.

- | | |
|-------------|-----------------------|
| Cook | teaches children. |
| Bursar | collects school fees. |
| Secretary | prepares food. |
| Teacher | types homework. |
| Gate keeper | keeps security |

10. Give one item that following groups of people use for doing their work;

- i) cook.....
 ii) teacher.....
 iii) bursar.....
 iv) policeman.....

11. Draw these things found in the kitchen.

jug	saucepan	kettle	knife

12. Write down any three wild animals.

- (i)
 (ii)
 (iii)

13. What are domestic animals?

.....

14. Mention any two domestic animals.

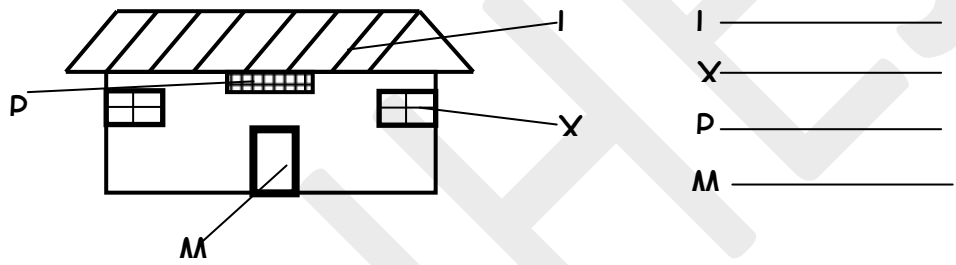
- i).....

ii).....
15. What are temporary houses?
.....
.....

16. Name any two examples of temporary houses.
(i)
(ii)

17. Write down any three things that a school gets from a nearby community.
(i)
(ii)
(iii)

19. Name the parts of the house below.



20. Write down any two items used for building a permanent house.
i)
ii)

OUR COMMUNITY.

21. What is a community?
.....
.....

22. Give the roles of the following people in our community.
i)doctor.....
ii)teacher.....
iii) cobbler

23. Mention any two activities done in our community.
i).....
ii).....

END

LITERACY B

TOPIC: HOME.

1. Animals which live at home are called

.....

2. Give three examples of domestic animals found at home.

i).....

ii).....

iii).....

3. *Draw the diagram of animals at home we use for*

transport	security

4. Why is a dog useful at home?

.....

5. Draw these things we make from animals hides and skins.

drum	shoes	hat	belt	bag

6. Circle two pet animals.

donkey, cat, rabbit, dog, cow

7. A..... chases away rats at home.

8. Name these dangerous objects.



9. Mention two domestic animals which are not eaten by man.

- i).....
 ii).....

10. Complete the table below.

Animal	youngone	Home
cow	_____	kraal
_____	kid	shed
pig	_____	sty
_____	lamb	_____

11. How do we care for domestic animals?


.....

Theme: Our home

12. What do birds give us?

- i).....
 ii).....

13. Name the parts of a bird.




14. Birds use their.....for breathing.

15. Give two examples of domestic birds.

- i).....
- ii).....

16. Name the life cycle of a bird.



- a. _____
- b. _____
- c. _____

17. Where do birds live?

.....

18. Complete correctly.

A nest is to a.....and a.....is to a cow.
A fish lives inwhile.....live in a
beehive.....

19. Why do people keep cats at home?

.....

20. Plants gives us.....and.....

21. How do we care for our plants?

.....

Theme: Our community

22. Draw these plants found at home.

Cassava plant	Banana plant	Sugarcane plant	Yam plant

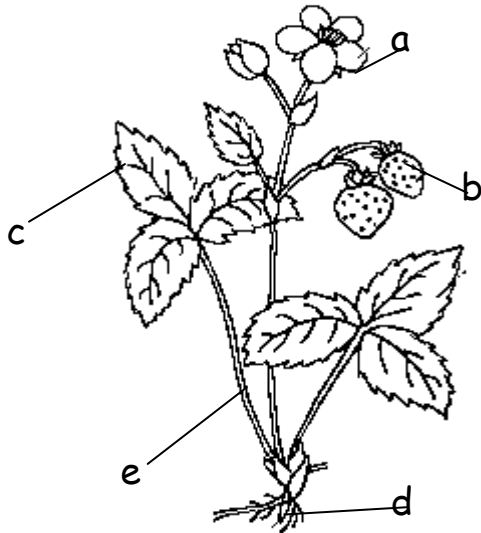
23. What is food?

.....
.....

24. Write down three main parts of a plant.

- i).....
- ii).....
- iii).....

25. Name these parts of a plant.



- a _____
- b _____
- c _____
- d _____
- e _____


26. Draw these basic needs of a man.

food	shelter	clothes	water

27. Mention any three places where we get food from.

- i).....
- ii).....
- iii).....

28. Name these ways of preserving food.



29. Give any three examples of food we eat.

- i).....
- ii).....

iii).....

Theme: Human body and health

30. **Match correctly.**

- eyes tasting
- nose hearing
- skin seeing
- ears smelling
- tongue feeling

31. **Draw these things we use to clean our bodies.**

sponge	towel	soap	basin	water

32. A normal person has.....sense.

33. Name two parts found on a head.

- i).....
- ii).....

34. Mention two common diseases you know.

- i).....
- ii).....

35. Give two ways of caring for our bodies.

- i).....
- ii).....

36. Why do we keep our bodies clean?

- i).....
- ii).....


37.is the general cleanliness of our environment.

38. Identify any two examples of immunisable diseases.

- i).....

ii).....

39. *Name these things we use to clean our environment.*



End

RELIGIOUS EDUCATION

DISCOVERING GOD'S GIFTS TO ME

1. What is your religious name?

.....

2. Who created heaven and earth?

.....

3. The name Emmanuel means?

.....

4. Circle three people found at school.

Bible, teacher, lakes, cooks, doll, nurses

5. Mention two places of worship.

i)

ii)

6. Who was the mother of Jesus?

.....

7. Write down two members of the family.

i).....

ii).....

8. Match these senses correctly.

i) feeling

eyes

ii) seeing

ears

iii) hearing

skin



iv) tasting

nose

v) smelling

tongue

9. Name these gifts God made to give us light.

10.created you and me.
11. Give three things we find in the church.
- (i)
- (ii)
- (iii)
12. Christians go toon Sunday.
13.was born on Christmas day.
14. Muslims go for prayers on
15. Jesus was born in(Mecca, Bethlehem)
16. Muslims pray.....times a day.
17. Name four animals kept at home.
- i)
- ii)
- iii)
- iv)
18. Circle people found in the church.
Pastor, Imam, Bishop
19. Who heads a family?
.....
20. **Match animals God created to their products.**
- hen milk
- cow skin
- goat eggs
21. **Tick the religious names.**
John, Mutebi, Joan, Kato, Kirabo
22. **Draw these people who need help.**

Pregnant mother	Old person	Lame person	baby

23. **Circle the uses of water.**

bathing, playing, cooking, running, drinking

24. **Match correctly.**

Muslims Saturday

Protestants Sunday

Adventists Friday

25. Name one activities children do at home.

.....

26. Name four birds God/Allah created.

i)

ii)

iii)

iv)

28. A.....cooks food at home.

END

KISWAHILI LUGHA

Jina langu ni.....

1. **Andika maneno haya kwa herufi kubwa (capital letters).**


- a) mwalimu.....
- b) mama.....
- c) baba.....

2. **Hesabu vitu hivi -(count in swahili).**




a)  _____

b)  _____

c)  _____

d)  _____
(moja, kumi, tano, tatu)

3. **Chora sehemu hizi za mwili(body parts).**

		
kichwa	mguu	mkono

4. **Kamilisha sentensi hizi kwa kiswahili.**

- a) Huyu ni.....yangu. (father)
- b)yangu. (mother)
- c)juu. (hand)
- d) Funga.....(eyes)
(mkono, macho, baba, mama)

5. Ambatanisha maneno haya sawa sawa (match).

A

B

Habari

marahaba

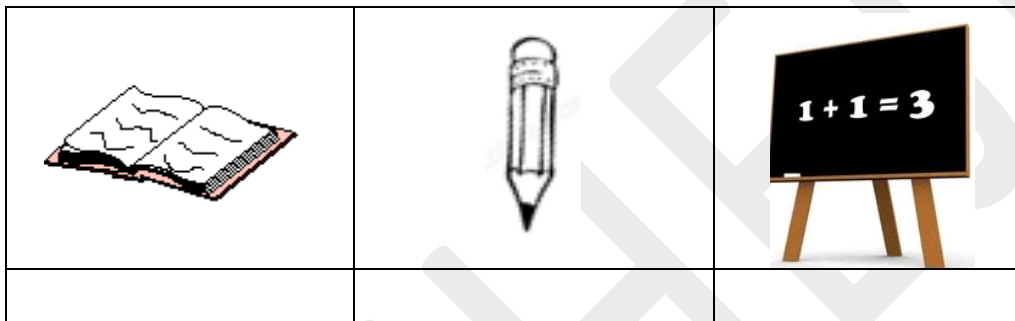
Hodi

nzuri

Shikamoo

karibu

6. Taja vitu hivi kwa Kiswahili. Name these things.(in Swahili)



(pensili, kitabu, ubao)

END